

Name _____

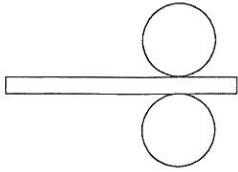
Date _____ Period _____

Homework 87

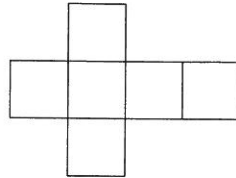
© 2012 Kuta Software LLC. All rights reserved.

Identify each solid given its net.

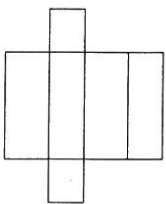
1)



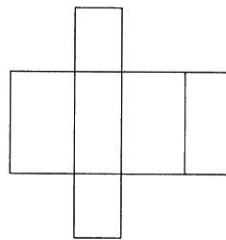
2)



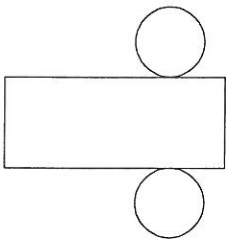
3)



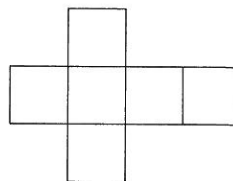
4)



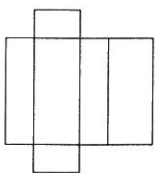
5)



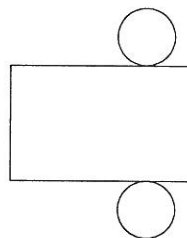
6)



7)

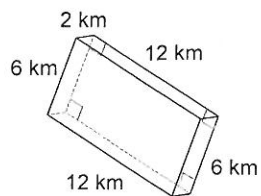


8)

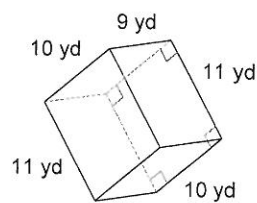


Find the surface area of each figure. Round your answers to the nearest thousandth, if necessary.

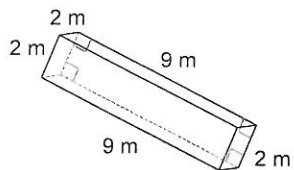
9)



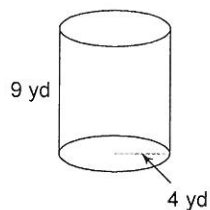
10)



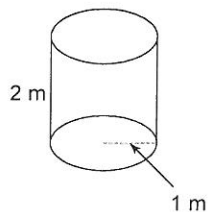
11)



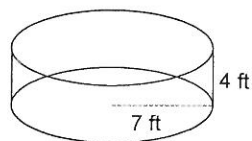
12)



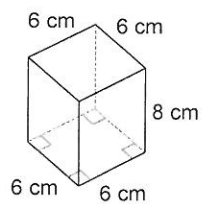
13)



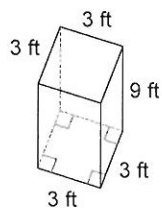
14)



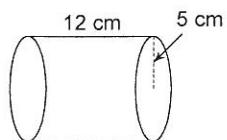
15)



16)



17)



18)

